

Cahier d'activités autonomes n°7

Prénom : _____



$$10 + 2$$

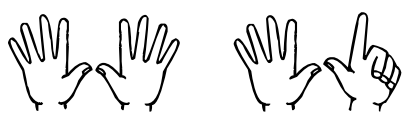
12



$$\square + \square$$



$$\square + \square$$



$$\square + \square$$



$$\square + \square$$



$$\square + \square$$



$1 + 1 = \dots\dots$

$2 + 2 = \dots\dots$

$3 + 3 = \dots\dots$

$4 + 4 = \dots\dots$

$1 + 0 + 2 = \dots\dots$

$5 + 5 = \dots\dots$

$4 + 1 + 3 = \dots\dots$

$2 + 6 = \dots\dots$

$1 + 7 = \dots\dots$

$8 + 2 = \dots\dots$

$5 - 1 = \dots\dots$

$7 - 0 = \dots\dots$

$8 - 8 = \dots\dots$

$3 - 1 = \dots\dots$


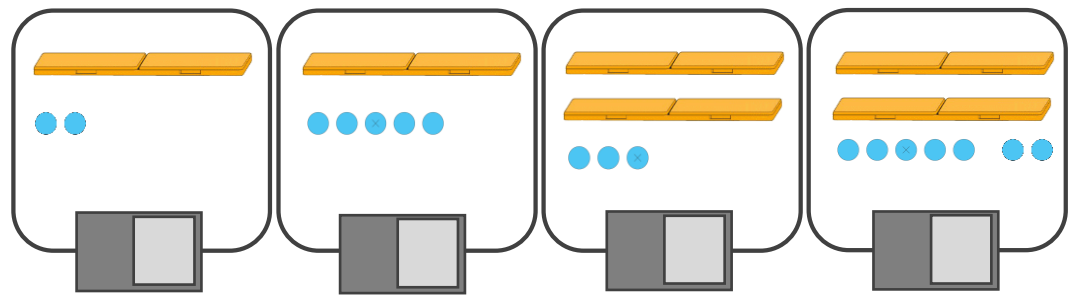
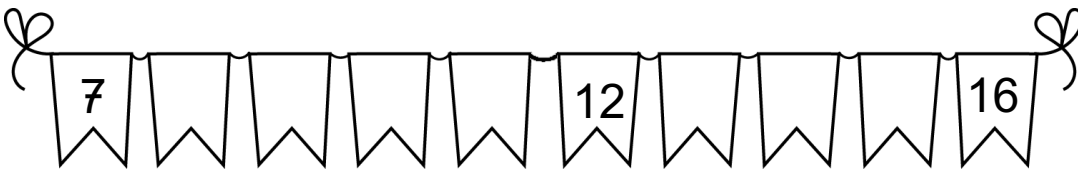
$8 - 2 = \dots\dots$

$7 - 3 = \dots\dots$

$8 - 4 = \dots\dots$

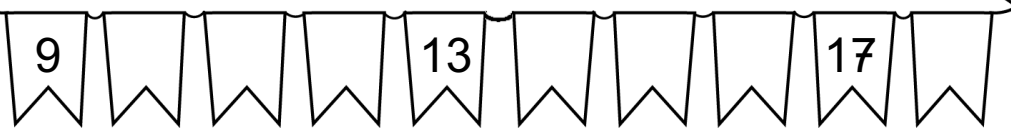
$6 - 3 = \dots\dots$





10	15	15	19	12	18	16	19
17	7	15	5	12	19	13	18


$10 + 7 = \dots\dots$ $10 + 5 = \dots\dots$
 $10 + 1 = \dots\dots$ $10 + 4 = \dots\dots$
 $10 + 8 = \dots\dots$ $10 + 9 = \dots\dots$



$\begin{array}{c} \textcircled{4} \\ / \quad \backslash \\ \textcircled{4} + \textcircled{\quad} \end{array}$	$\begin{array}{c} \textcircled{5} \\ / \quad \backslash \\ \textcircled{3} + \textcircled{\quad} \end{array}$	$\begin{array}{c} \textcircled{3} \\ / \quad \backslash \\ \textcircled{2} + \textcircled{\quad} \end{array}$	$\begin{array}{c} \textcircled{4} \\ / \quad \backslash \\ \textcircled{2} + \textcircled{\quad} \end{array}$	$\begin{array}{c} \textcircled{5} \\ / \quad \backslash \\ \textcircled{4} + \textcircled{\quad} \end{array}$
$\begin{array}{c} \textcircled{3} \\ / \quad \backslash \\ \textcircled{0} + \textcircled{\quad} \end{array}$	$\begin{array}{c} \textcircled{4} \\ / \quad \backslash \\ \textcircled{3} + \textcircled{\quad} \end{array}$	$\begin{array}{c} \textcircled{5} \\ / \quad \backslash \\ \textcircled{2} + \textcircled{\quad} \end{array}$	$\begin{array}{c} \textcircled{3} \\ / \quad \backslash \\ \textcircled{1} + \textcircled{\quad} \end{array}$	$\begin{array}{c} \textcircled{5} \\ / \quad \backslash \\ \textcircled{1} + \textcircled{\quad} \end{array}$

<p>$7 + \textcircled{3} = 10$</p>	<p>$8 + \dots\dots = 10$</p>	<p>$6 + \dots\dots = 10$</p>
--	---	---

<p>$9 + \dots\dots = 10$</p>	<p>$5 + \dots\dots = 10$</p>	<p>$3 + \dots\dots = 10$</p>
---	---	---






ta te ti to
tu té tè

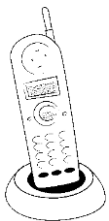


ta te ti to
tu té tè

moto - radis - dame - tasse
domino - tétine - salade
matelas - tortue






Handwriting practice lines (four horizontal lines).



ta te ti to
tu té tè




da de di do
du dé dè




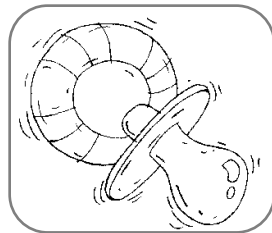
Handwriting practice lines (four horizontal lines).



da de di do
du dé dè



da de di do
du dé dè



Handwriting practice lines (four horizontal lines).

F

J

M



tête

fête

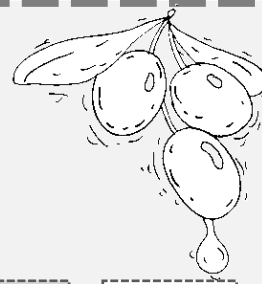
têtard



tache

tasse

tarot



o

u


ve

li

mi

ze

olive



to

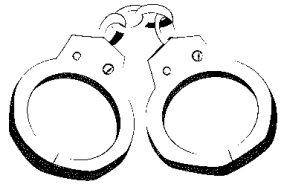
mi

mo

do

ni


no



menu

matelas


menottes



saleté

salade

sali



ta

na

te

to

ma

de



na

ta

de

ma

la


te



judo

joli

jus



doré

domino

dormir